

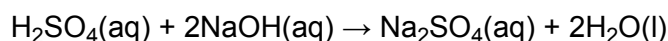
F321: Atoms, Bonds and Groups

Moles and Equations

108 Marks

1. (a) A student carries out a titration to find the concentration of some sulfuric acid.

The student finds that 25.00 cm³ of 0.0880 mol dm⁻³ aqueous sodium hydroxide, NaOH, is neutralised by 17.60 cm³ of dilute sulfuric acid, H₂SO₄.



- (i) Calculate the amount, in moles, of NaOH used.

answer = mol

[1]

- (ii) Determine the amount, in moles, of H₂SO₄ used.

answer = mol

[1]

- (iii) Calculate the concentration, in mol dm⁻³, of the sulfuric acid.

answer = mol dm⁻³

[1]

- (b) After carrying out the titration in (a), the student left the resulting solution to crystallise. White crystals were formed, with a formula of Na₂SO₄•x H₂O and a molar mass of 322.1 g mol⁻¹.

- (i) What term is given to the '•x H₂O' part of the formula?

.....

[1]

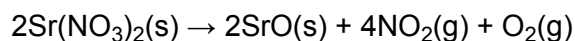
(ii) Using the molar mass of the crystals, calculate the value of x .

answer =

[2]

[Total 6 marks]

2. The element strontium forms a nitrate, $\text{Sr}(\text{NO}_3)_2$, which decomposes on heating as shown below.

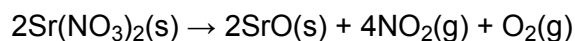


(i) Using oxidation numbers, explain why the reaction involves both oxidation and reduction.

.....
.....
.....
.....

[3]

(ii) A student heats 5.29 g of $\text{Sr}(\text{NO}_3)_2$ and collects the gas at room temperature and pressure, RTP.



Calculate the volume of gas, in dm^3 , obtained by the student at RTP.

Molar mass of $\text{Sr}(\text{NO}_3)_2 = 211.6 \text{ g mol}^{-1}$.

answer = dm^3

[3]

[Total 6 marks]

3. In the sixteenth century, a large deposit of graphite was discovered in the Lake District. People at the time thought that the graphite was a form of lead. Nowadays, graphite is used in pencils but it is still referred to as 'pencil lead'. A student decided to investigate the number of carbon atoms in a 'pencil lead'. He found that the mass of the 'pencil lead' was 0.321 g.

- (i) Calculate the amount, in mol, of carbon atoms in the student's pencil lead. Assume that the 'pencil lead' is pure graphite.

answer = mol

[1]

- (ii) Using the Avogadro constant, N_A , calculate the number of carbon atoms in the student's 'pencil lead'.

number of carbon atoms =

[1]

[Total 2 marks]

4. The Group 2 element barium, Ba, is silvery white when pure but blackens when exposed to air.

The blackening is due to the formation of both barium oxide and barium nitride. The nitride ion is N^{3-} .

- (a) Predict the formula of:

barium oxide barium nitride

[2]

- (b) A 0.11 g sample of pure barium was added to 100 cm³ of water.



- (i) Show that 8.0×10^{-4} mol of Ba were added to the water.

[1]

- (ii) Calculate the volume of hydrogen, in cm^3 , produced at room temperature and pressure.

volume = cm^3

[1]

- (iii) Calculate the concentration, in mol dm^{-3} , of the $\text{Ba(OH)}_2(\text{aq})$ solution formed.

concentration = mol dm^{-3}

[1]

- (iv) State the approximate pH of the $\text{Ba(OH)}_2(\text{aq})$ solution.

.....

[1]

- (c) A student repeated the experiment in (b) using a 0.11 g sample of barium that had blackened following exposure to the air.

Suggest why the volume of hydrogen produced would be slightly less than the volume collected using pure barium.

.....
.....
.....

[1]

- (d) Describe and explain the trend, down the group, in the reactivity of the Group 2 elements with water.

.....

.....

.....

.....

.....

.....

.....

.....

.....

.....

.....

.....

.....

.....

.....

.....

.....

.....

.....

.....

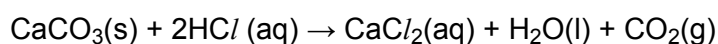
.....

.....

[5]

[Total 12 marks]

5. Calcium carbonate, CaCO_3 , reacts with hydrochloric acid as shown in the equation below.



7.50×10^{-3} mol CaCO_3 reacts with $0.200 \text{ mol dm}^{-3}$ HCl .

- (i) Calculate the volume, in cm^3 , of $0.200 \text{ mol dm}^{-3}$ HCl required to react with 7.50×10^{-3} mol CaCO_3 .

answer = cm^3

[2]

- (ii) Calculate the volume, in cm^3 , of CO_2 formed at room temperature and pressure.

answer = cm^3

[1]

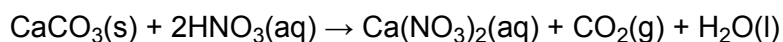
[Total 3 marks]

6. Calcium and its compounds, have properties typical of Group 2 in the Periodic Table.

Calcium carbonate, CaCO_3 , reacts with acids such as nitric acid.

A student neutralised 2.68 g of CaCO_3 with 2.50 mol dm^{-3} nitric acid, HNO_3 .

The equation for this reaction is shown below.



- (i) Determine the amount, in mol, of CaCO_3 reacted.

amount = mol

[2]

- (ii) Calculate the volume, in cm^3 , of CO_2 produced at room temperature and pressure.

volume = cm^3

[1]

- (iii) Calculate the volume of $2.50 \text{ mol dm}^{-3} \text{ HNO}_3$ needed to neutralise 2.68 g of CaCO_3 .

volume = cm^3

[2]

[Total 5 marks]

7. Rubidium forms an ionic compound with silver and iodine. This compound has a potential use in miniaturised batteries because of its high electrical conductivity.

The empirical formula of this ionic compound can be calculated from its percentage composition by mass: Rb, 7.42%; Ag, 37.48%; I, 55.10%.

- (i) Define the term *empirical formula*.

.....
.....
.....

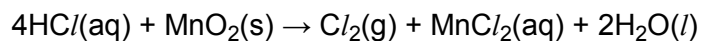
[1]

- (ii) Calculate the empirical formula of the compound.

[2]

[Total 3 marks]

8. Chlorine can be prepared by reacting concentrated hydrochloric acid with manganese(IV) oxide.



- (a) A student reacted 50.0 cm^3 of 12.0 mol dm^{-3} hydrochloric acid with an excess of manganese(IV) oxide.

- (i) Calculate how many moles of HCl were reacted.

answer = mol

[1]

- (ii) Calculate the volume of $\text{Cl}_2(\text{g})$ produced, in dm^3 .

Under the experimental conditions, one mole of $\text{Cl}_2(\text{g})$ occupies 24.0 dm^3 .

answer = dm^3

[2]

- (b) In this reaction, chlorine is oxidised.

Use oxidation numbers to determine what is reduced.

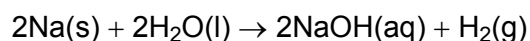
.....
.....
.....
.....

[2]

[Total 5 marks]

9. This question looks at the reaction of sodium with water and with oxygen.

A chemist reacted 0.0500 mol of sodium with water to form 50.0 cm^3 of aqueous sodium hydroxide.



(i) What mass of Na was reacted?

mass = g

[1]

(ii) Calculate the volume of H₂, in dm³, that would be produced at room temperature and pressure, r.t.p.

1 mol of gas molecules occupies 24.0 dm³ at r.t.p.

volume = dm³

[2]

(iii) Calculate the concentration, in mol dm⁻³, of NaOH that was formed.

concentration = mol dm⁻³

[1]

[Total 4 marks]

10. Sodium reacts with excess oxygen to form sodium peroxide, Na₂O₂.

Na₂O₂ is used in laundry bleaches. When added to water a reaction takes place forming an alkaline solution and hydrogen peroxide, H₂O₂.

(i) Construct a balanced equation for the formation of sodium peroxide from sodium.

.....

[1]

(ii) Construct a balanced equation for the reaction of sodium peroxide with water.

.....


[1]

(iii) Draw a 'dot-and-cross' diagram for a molecule of H₂O₂. Show outer electrons only.

[2]

[Total 4 marks]

11. Barium metal can be extracted from barium oxide, BaO, by reduction with aluminium.



Calculate the mass of barium metal that could be produced from reduction of 500 g of barium oxide using this method.

answer = g

[Total 4 marks]

12. Water, ammonia and sulphur dioxide react together to form a compound **A** which has the following percentage composition by mass:

N, 24.12%;

H, 6.94%;

S, 27.61%;

O, 41.33%.

(i) Calculate the empirical formula of compound **A**.

[2]

(ii) Suggest a balanced equation for the formation of compound **A** from the reaction of water, ammonia and sulphur dioxide.

.....

[1]

[Total 3 marks]

13. A student carried out two experiments using chlorine gas, $\text{Cl}_2(\text{g})$.

(a) In the first experiment, the student bubbled chlorine through 120 cm^3 of an aqueous solution of $0.275 \text{ mol dm}^{-3}$ sodium hydroxide, $\text{NaOH}(\text{aq})$.

The equation for this reaction is shown below.



Under the reaction conditions, 1 mole of $\text{Cl}_2(\text{g})$ occupies 24.0 dm^3 .

(i) What is meant by the term *the mole*?

.....
.....
.....

[1]

(ii) How many moles of NaOH were in the 120 cm³ volume of NaOH(aq)?

answer mol

[1]

(iii) Calculate the volume of Cl₂(g) that was needed to react with the NaOH(aq) used.

answer

[2]

(iv) What is a common use for the solution that the student prepared?

.....

[1]

(b) In the second experiment, the student repeated the procedure in (a) but with hot concentrated sodium hydroxide. A different reaction took place in which sodium chlorate (V) was formed instead of NaClO.

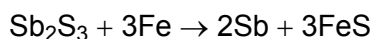
Suggest the formula of sodium chlorate (V).

.....

[1]

[Total 6 marks]

14. Antimony is found naturally in a number of minerals including stibnite. Stibnite typically contains 5% of Sb₂S₃. Antimony can be obtained by reducing Sb₂S₃ with scrap iron.



(i) How many moles of Sb₂S₃ are in 500 kg of a typical sample of stibnite containing 5% by mass of Sb₂S₃?

molar mass of Sb₂S₃ = 340 g mol⁻¹; relative atomic mass of Sb = 122

..... mol

[2]

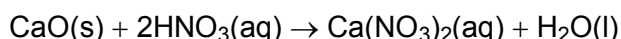
- (ii) Calculate the mass of antimony that could be obtained by processing 500 kg of stibnite.

mass = kg

[2]

[Total 4 marks]

15. Calcium oxide neutralises acids such as nitric acid. A student neutralised 1.50 g of CaO with 2.50 mol dm^{-3} nitric acid, HNO_3 . The equation for this reaction is shown below.



- (i) How many moles of CaO were reacted?

..... mol

[2]

- (ii) Calculate the volume of 2.50 mol dm^{-3} HNO_3 needed to exactly neutralise 1.50 g of CaO.

volume = cm^3

[2]

[Total 4 marks]

16. The nitrate ion, NO_3^- , in $\text{Ca(NO}_3)_2$ contains both covalent and dative covalent bonds.

- (i) What is the difference between a covalent bond and a dative covalent bond?

.....
.....
.....

[1]

- (ii) Calcium nitrate decomposes on heating to form calcium oxide, oxygen and nitrogen(IV) oxide, NO_2 .

Construct a balanced equation for this reaction.

.....

[1]

[Total 2 marks]

17. Aqueous silver nitrate can be used as a test for halide ions. A student decided to carry out this test on a solution of magnesium chloride. The bottle of magnesium chloride that the student used showed the formula $MgCl_2 \cdot 6H_2O$.

The student dissolved a small amount of $MgCl_2 \cdot 6H_2O$ in water and added aqueous silver nitrate to the aqueous solution.

(i) What is the molar mass of $MgCl_2 \cdot 6H_2O$?

molar mass = $g\ mol^{-1}$

[1]

(ii) What would the student see after adding the aqueous silver nitrate, $AgNO_3(aq)$?

.....

[1]

(iii) Write an ionic equation for this reaction. Include state symbols.

.....

[2]

(iv) Using aqueous silver nitrate, it is sometimes difficult to distinguish between chloride, bromide and iodide ions.

How can aqueous ammonia be used to distinguish between these three ions?

.....
.....
.....
.....
.....

[3]

[Total 7 marks]

18. In 2000, the mass of CO_2 emitted in the UK was equivalent to 1 kg per person in every hour.

(i) Calculate the volume of 1 kg of carbon dioxide. Assume that 1 mole of CO_2 occupies $24\ dm^3$.

volume = dm^3

[2]

- (ii) The UK has set a target to cut CO₂ emissions by 60% of the 2000 value by 2050. Calculate the reduction needed in the volume of CO₂ emissions each hour per person if the target is to be met.

answer: dm³

[1]

[Total 3 marks]

19. To prepare the aqueous calcium chloride, the student added the exact amount of calcium so that all the hydrochloric acid had reacted. She used 50 cm³ of 2.0 mol dm⁻³ HCl.

- (i) How many moles of HCl had she used?

[1]

- (ii) Calculate the mass of calcium that she used.

[2]

- (iii) The student added some more calcium and she was surprised that a reaction still took place.

- Explain this observation.
- Write a balanced equation for this reaction.

.....
.....
.....

[3]

[Total 6 marks]

20. A student reacted 1.44 g of titanium with chlorine to form 5.70 g of a chloride X.

- (i) How many moles of Ti atoms were reacted?

[1]

- (ii) How many moles of Cl atoms were reacted?

[2]

- (iii) Determine the empirical formula of X.

[1]

- (iv) Construct a balanced equation for the reaction between titanium and chlorine.

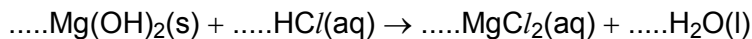
.....

[1]

[Total 5 marks]

21. A student had a stomach-ache and needed to take something to neutralise excess stomach acid. He decided to take some Milk of Magnesia, which is an aqueous suspension of magnesium hydroxide, Mg(OH)_2 .

- (a) The main acid in the stomach is hydrochloric acid, HCl(aq) , and the unbalanced equation for the reaction that takes place with Milk of Magnesia is shown below.



Balance the equation by adding numbers where necessary in the unbalanced equation above.

[1]

- (b) The student's stomach contained 500 cm^3 of stomach fluid with an acid concentration of $0.108 \text{ mol dm}^{-3}$. The student swallowed some Milk of Magnesia containing 2.42 g Mg(OH)_2 . He wondered whether this dose was sufficient to neutralise the stomach acid.

Assume that all the acid in the stomach fluid was $0.108 \text{ mol dm}^{-3}$ hydrochloric acid.

- (i) How many moles of HCl were in the 500 cm^3 of stomach fluid?

[1]

- (ii) Calculate the mass of Mg(OH)_2 necessary to neutralise this stomach fluid.

[3]

- (iii) Determine whether the student swallowed too much, too little, or just the right amount of Milk of Magnesia to neutralise the stomach acid.

.....
.....

[1]

[Total 6 marks]

22. Bromine forms three compounds with phosphorus. The compounds have the molecular formulae PBr_3 , PBr_5 and P_2Br_4 .

- (i) Explain what is meant by the term *molecular formula*.

.....
.....

[1]

- (ii) PBr_3 can be prepared by heating bromine with phosphorus, P_4 .

Write a balanced equation for this reaction.

.....

[1]

- (iii) Compound **A** is one of the three bromides of phosphorus above. It has the following percentage composition by mass: P, 16.2%; Br, 83.8%.

Use this percentage composition to calculate the empirical formula and to determine the identity of compound **A**.

empirical formula

identity of compound **A**

[3]

[Total 5 marks]

- 23.** Nickel makes up 25% of the total mass of a fifty pence coin. A fifty pence coin has mass of 8.0 g.

- (i) Calculate how many **moles** of nickel atoms are in a fifty pence coin.

answermol

[2]

- (ii) Calculate the **number** of atoms of nickel in a fifty pence coin.

$$L = 6.02 \times 10^{23} \text{ mol}^{-1}$$

answer atoms

[1]

[Total 3 marks]